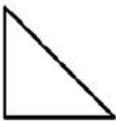

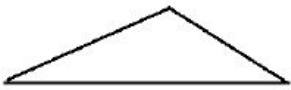


Smarter Balanced Assessment Item Illustrating 4.G.A.2

© ITEM RETRIEVED WITH PERMISSION FROM THE SMARTER BALANCED CLAIM 1 ITEM SPECIFICATIONS AVAILABLE FROM [HTTP://WWW.SMARTERBALANCED.ORG/ASSESSMENTS/DEVELOPMENT](http://www.smarterbalanced.org/assessments/development); ACCESSED NOVEMBER 2017. PLEASE CONTACT SMARTER BALANCED DIRECTLY FOR ADDITIONAL INFORMATION ON TERMS OF USE.

Example Stem: Decide whether the shape appears to be a right triangle. Select Yes or No for each triangle.

	Yes	No
		
		
		

Answer Key

Y, N, N

Elaboration on Alignment

This item targets the part of standard 4.G.A.2 that calls for students to recognize right triangles as a category and identify right triangles. The item is carefully worded by asking whether the shape “appears” to be a right triangle to ensure that it is mathematically precise since concluding that a shape “is” a right triangle requires specific measurements to be known.

Learn More

Learn more with the [MATH Assessment Item Alignment Modules](#) at www.achievethecore.org.